



**INSTRUMEN KEMAHIRAN ASAS  
MATEMATIK SEKOLAH RENDAH  
( IKAM )**

**UJIAN PELEPASAN  
TAHAP 2**

**UNIT PEMULIHAN KHAS  
BAHAGIAN PENDIDIKAN KHAS  
KEMENTERIAN PELAJARAN MALAYSIA  
ARAS 2, BLOK E2, KOMPLEK E,  
PUSAT PENTADBIRAN KERAJAAN PERSEKUTUAN,  
62604 PUTRAJAYA**



**PROGRAM PEMULIHAN KHAS**

**UJIAN PELEPASAN MATEMATIK**

**TAHAP DUA**

Nama : \_\_\_\_\_

Tahun : \_\_\_\_\_

Tarikh : \_\_\_\_\_

/ 75

# JADUAL SPESIFIKASI UJIAN PELEPASAN

## EMISSION TEST SCHEDULE MATHEMATICS

<b>Kemahiran Yang Diuji</b> Skills To Be Tested	<b>Jumlah Item</b> Total Numbers Of Items
1) <b>PENAMBAHAN</b> Addition	22
2) <b>PENOLAKAN</b> Subtraction	22
3) <b>PENDARABAN</b> Multiplication	16
4) <b>PEMBAHAGIAN</b> Division	15
<b>JUMLAH</b> Total	75

Topik 1 : **Operasi Tambah**  
*Addition*

Arahan : **Cari jawapan.**

*Find the answers.*

1)  $4 + 3 = \underline{\hspace{2cm}}$

2)  $7 + 6 = \underline{\hspace{2cm}}$

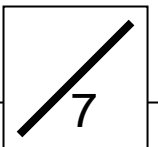
3)  $6 + 2 = \underline{\hspace{2cm}}$

4)  $9 + 7 = \underline{\hspace{2cm}}$

5) 
$$\begin{array}{r} 21 \\ + 6 \\ \hline \end{array}$$

6) 
$$\begin{array}{r} 14 \\ + 2 \\ \hline \end{array}$$

7) 
$$\begin{array}{r} 17 \\ + 2 \\ \hline \end{array}$$



Topik 1 : **Operasi Tambah**  
*Addition*

Arahan : **Cari jawapan.**

*Find the answers*

8) 
$$\begin{array}{r} 36 \\ + 30 \\ \hline \end{array}$$

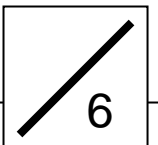
9) 
$$\begin{array}{r} 54 \\ + 38 \\ \hline \end{array}$$

10) 
$$\begin{array}{r} 64 \\ + 19 \\ \hline \end{array}$$

11) 
$$\begin{array}{r} 67 \\ + 58 \\ \hline \end{array}$$

12) 
$$\begin{array}{r} 841 \\ + 736 \\ \hline \end{array}$$

13) 
$$\begin{array}{r} 554 \\ + 767 \\ \hline \end{array}$$



Topik 1 : **Operasi Tambah**  
*Addition*

Arahan : **Jumlahkan**

*Complete the following sums.*

14) 
$$\begin{array}{r} 352 \\ + 547 \\ \hline \end{array}$$

15) 
$$\begin{array}{r} 445 \\ + 334 \\ \hline \end{array}$$

16) 
$$\begin{array}{r} 543 \\ + 206 \\ \hline \end{array}$$

17) 
$$\begin{array}{r} 332 \\ + 447 \\ \hline \end{array}$$

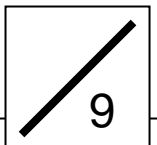
18) 
$$\begin{array}{r} 546 \\ + 116 \\ \hline \end{array}$$

19) 
$$\begin{array}{r} 305 \\ + 288 \\ \hline \end{array}$$

20) 
$$\begin{array}{r} 542 \\ + 938 \\ \hline \end{array}$$

21) 
$$\begin{array}{r} 654 \\ + 877 \\ \hline \end{array}$$

22) 
$$\begin{array}{r} 876 \\ + 977 \\ \hline \end{array}$$



Topik 2 : **Operasi Tolak**  
*Subtraction*

Arahan : **Tolakkan.**

*Find the different.*

23)  $7 - 2 = \underline{\hspace{2cm}}$

24)  $5 - 3 = \underline{\hspace{2cm}}$

25)  $14 - 4 = \underline{\hspace{2cm}}$

26)  $17 - 5 = \underline{\hspace{2cm}}$

27)

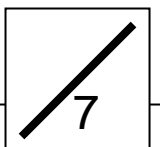
$$\begin{array}{r} 6 \\ - 3 \\ \hline \end{array}$$

28)

$$\begin{array}{r} 9 \\ - 7 \\ \hline \end{array}$$

29)

$$\begin{array}{r} 10 \\ - 9 \\ \hline \end{array}$$



Topik 2 : **Operasi Tolak**  
*Subtraction*

Arahan : **Tolakkan.**

*Find the different.*

30)

$$\begin{array}{r} 13 \\ - 6 \\ \hline \end{array}$$

31)

$$\begin{array}{r} 17 \\ - 9 \\ \hline \end{array}$$

32)

$$\begin{array}{r} 53 \\ - 6 \\ \hline \end{array}$$

33)

$$\begin{array}{r} 90 \\ - 70 \\ \hline \end{array}$$

34)

$$\begin{array}{r} 48 \\ - 25 \\ \hline \end{array}$$

35)

$$\begin{array}{r} 54 \\ - 36 \\ \hline \end{array}$$



Topik 2 : **Operasi Tolak**  
*Subtraction*

Arahan : **Cari jawapan.**

*Find the answers.*

36)

$$\begin{array}{r} 465 \\ - 123 \\ \hline \end{array}$$

37)

$$\begin{array}{r} 680 \\ - 443 \\ \hline \end{array}$$

38)

$$\begin{array}{r} 564 \\ - 235 \\ \hline \end{array}$$

39)

$$\begin{array}{r} 620 \\ - 505 \\ \hline \end{array}$$

40)

$$\begin{array}{r} 808 \\ - 138 \\ \hline \end{array}$$

41)

$$\begin{array}{r} 537 \\ - 260 \\ \hline \end{array}$$

42)

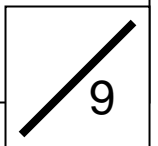
$$\begin{array}{r} 842 \\ - 327 \\ \hline \end{array}$$

43)

$$\begin{array}{r} 806 \\ - 327 \\ \hline \end{array}$$

44)

$$\begin{array}{r} 917 \\ - 566 \\ \hline \end{array}$$



Topik 3 : **Darab**  
Multiplication

Arahan : **Cari jawapan.**

*Find the answers.*

45)  $3 \times 0 = \underline{\quad}$

46)  $1 \times 5 = \underline{\quad}$

47)  $5 \times 3 = \underline{\quad}$

48)  $4 \times 2 = \underline{\quad}$

49)  $4 \times 6 = \underline{\quad}$

50)  $8 \times 6 = \underline{\quad}$

51)  $5 \times 4 = \underline{\quad}$

52)  $6 \times 7 = \underline{\quad}$

53)  $3 \times 6 = \underline{\quad}$

54)  $4 \times 8 = \underline{\quad}$

55)  $8 \times 5 = \underline{\quad}$

56)  $5 \times 5 = \underline{\quad}$

57)  $3 \times 9 = \underline{\quad}$

58)  $4 \times 7 = \underline{\quad}$

59)  $7 \times 8 = \underline{\quad}$

60)  $3 \times 8 = \underline{\quad}$

Topik 4 : **Bahagi**  
*Division*

Arahan : **Cari jawapan**

*Find the answers.*

61)  $6 \div 2 = \underline{\quad}$

62)  $25 \div 5 = \underline{\quad}$

63)  $14 \div 2 = \underline{\quad}$

64)  $20 \div 4 = \underline{\quad}$

65)  $18 \div 3 = \underline{\quad}$

66)  $15 \div 3 = \underline{\quad}$

67)  $24 \div 6 = \underline{\quad}$

68)  $48 \div 6 = \underline{\quad}$

69)  $45 \div 9 = \underline{\quad}$

70)  $49 \div 7 = \underline{\quad}$

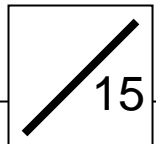
71)  $28 \div 7 = \underline{\quad}$

72)  $72 \div 8 = \underline{\quad}$

73)  $72 \div 9 = \underline{\quad}$

74)  $64 \div 8 = \underline{\quad}$

75)  $35 \div 7 = \underline{\quad}$





**INSTRUMEN KEMAHIRAN ASAS  
MATEMATIK SEKOLAH RENDAH  
(IKAM)**

**BORANG REKOD  
UJIAN PELEPASAN  
TAHAP 2**

**EMISSION TEST SCHEDULE  
MATHEMATICS**

# Elementary Mathematics Emission Test

Name : \_\_\_\_\_

Date of Birth : \_\_\_\_\_ Age : \_\_\_\_\_ Years : \_\_\_\_\_

School : \_\_\_\_\_

Teacher's Note:

1. Tick ( / ) for correct answers, and tick ( X ) if pupil did not attempt any item.
2. One mark for each correct answer and write the marks in the total score.

NO	TOPIC	COMPULSORY SCORE	TOTAL SCORE
1	Addition A.	7 / 7	/ 7
	B.	5 / 6	/ 6
	C.	7 / 9	/ 9
2	Subtraction D.	7 / 7	/ 7
	E.	5 / 6	/ 6
	F.	7 / 9	/ 9

NO	TOPIC	COMPULSORY SCORE	TOTAL S CORE
3	Multiplication G .	12 / 16	/ 16
4	Division F .	10 / 15	/ 15

**Achievement :** 60 / 75

Not Achieve	
Achieve	

**Teacher's Remarks :**

---



---

\_\_\_\_\_

( Signature )

\_\_\_\_\_

( cap )

Name : \_\_\_\_\_

Date : \_\_\_\_\_

# Elementary Mathematics Emission Test

Name : \_\_\_\_\_

Date of Birth : \_\_\_\_\_ Age : \_\_\_\_\_ Years : \_\_\_\_\_

School : \_\_\_\_\_

No	Tajuk	Markah Penuh	Markah Wajib Lulus	Markah Diperolehi	Keputusan
1	A	7	7		•LULUS •GAGAL
	B	6	5		•LULUS •GAGAL
	C	9	7		•LULUS •GAGAL
2	D	7	7		•LULUS •GAGAL
	E	6	5		•LULUS •GAGAL
	F	9	7		•LULUS •GAGAL
3	G	16	12		•LULUS •GAGAL
4	H	15	10		•LULUS •GAGAL
JUMLAH		75	60		

Catatan:

Murid dianggap menguasai kemahiran asas matematik sekiranya lulus semua item yang diuji.